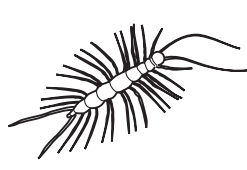


Name _____

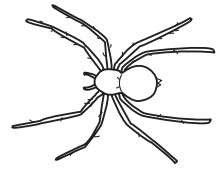
Class _____

Arthropods are split into four groups: crustaceans, insects, arachnids, and centipedes and millipedes. **Crustaceans** have chalky shells and 10–14 legs (although one pair of legs might be pincers). **Insects** have six legs and bodies divided into three parts. **Arachnids** have eight legs and bodies in two parts. **Centipedes and millipedes** are long and thin and have many legs.


1 Look at the pictures below. On the line underneath each one, write the word crustacean, insect, arachnid or centipede/millipede.



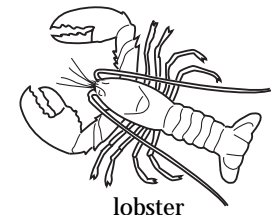
Lithobius




spider



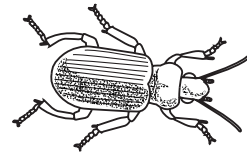
ant



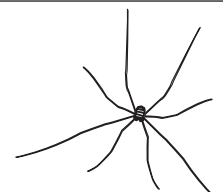
lobster



ladybird



beetle



harvestman



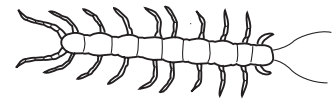
crab

2 Fill in the bar chart to show the different numbers of each group in the pictures above.


Number found

3 Where do most crustaceans live?

4 Look at the pictures below. Write down the differences between a centipede and a millipede.



centipede



millipede

S literacy, numeracy, knowledge