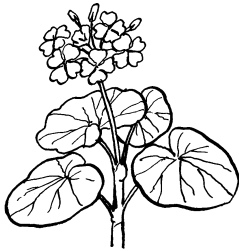



Plant adaptations for survival

Name _____ Class _____

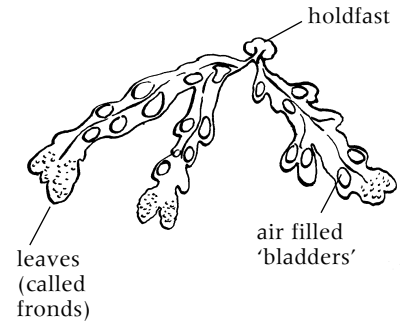
Look at the pictures of these three plants.



Plant A



Plant B



Plant C



1 Next to each of these areas, write the letter of the plant you would expect to find there.

Desert _____ Flower bed _____ Sea shore rock pool _____

2 a What process do plants use to make their own food? _____

b Name the part of each plant that is adapted for this process.

Plant A _____ Plant B _____

Plant C _____

3 Name the part of each plant that is adapted to hold the plant in place.

Plant A _____ Plant B _____

Plant C _____

4 Plants need **mineral salts** to grow. Plants living on land take water and mineral salts from the soil.

a Which part of plant A is adapted to do this? _____

b Which part of plant C do you think is adapted to do this? _____

5 Explain why these plants have these adaptations.

a Plant B has spines. _____

b Plant C has air-filled bladders. _____

S knowledge