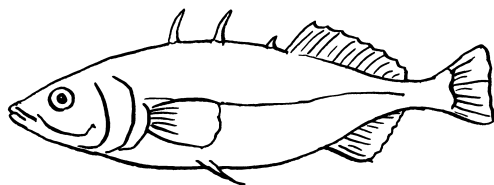


Name _____


Class _____



1 Draw a line from each animal to the habitat you would expect to find it in. For each animal name one adaptation it has for living in that habitat. For each habitat name another organism that lives there.



An adaptation of a stickleback is:



An adaptation of a limpet is: _____




An adaptation of a thrush is: _____



Another organism that lives here is: _____



Another organism that lives here is: _____



Another organism that lives here is: _____

2 Copy and complete the sentences using words from the box.

adapted environment habitat organisms physical

Living things are called _____. The area where an organism lives is called a _____. The surroundings of an organism are called its _____. The conditions in an environment are caused by _____ environmental factors. Animals and plants have to be _____ to the conditions where they live.



knowledge, literacy