

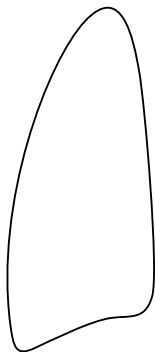
Name _____

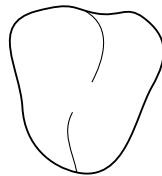
Class _____

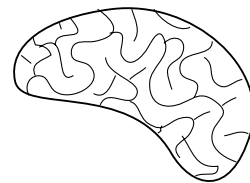


1 Find out what the excretory system is. Write down a couple of sentences about it.

2 On the line beneath each organ, write its name. Then draw a line from each organ to the organ system(s) it belongs in.









CIRCULATORY SYSTEM

NERVOUS SYSTEM

DIGESTIVE SYSTEM

BREATHING SYSTEM

EXCRETORY SYSTEM

